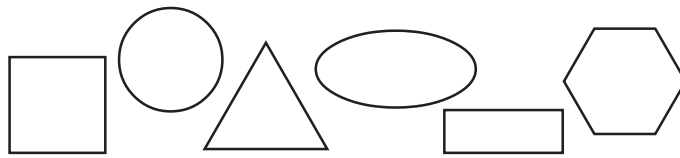
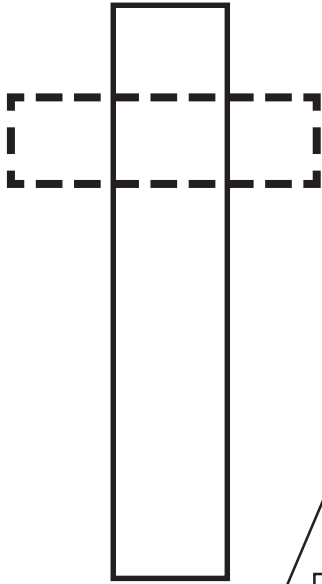


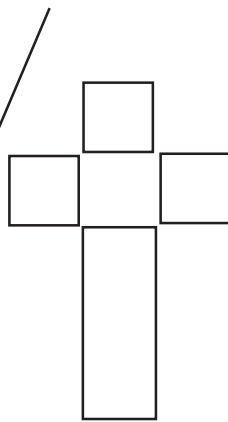
## Shapes make Shapes



Choose 3 shapes that can be made from other shapes



This one is done for you.  
Look how a cross is made  
of two rectangles.



Or is it 3 squares and  
one rectangle?